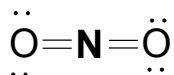
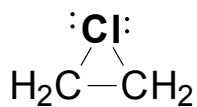
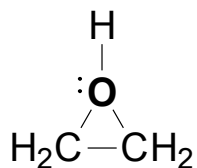
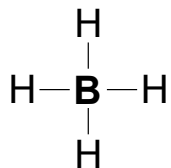
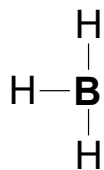


1. (5 pts) Calculate the Formal Charge on each atom below in **BOLD**.
 Note: all valence (outer shell) electrons are shown.



2. (5 pts) Indicate the hybridization of each Oxygen atom in Vitamin C (below):

