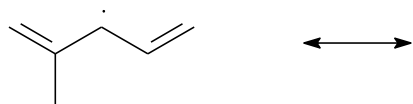
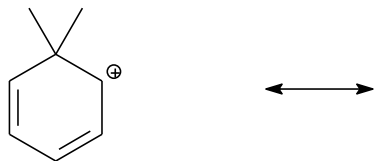
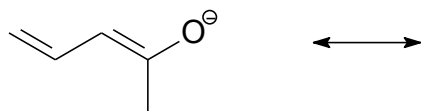


1. (9 pts). For each of the reactive intermediates below, draw TWO more resonance forms. Use arrows to show "pushing of electrons".



2. (1 pt.) Draw the Resonance Hybrid (the weighted average of the available resonance forms) of the resonance structures shown below.

