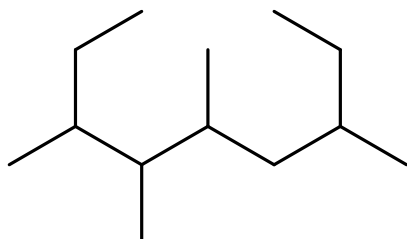
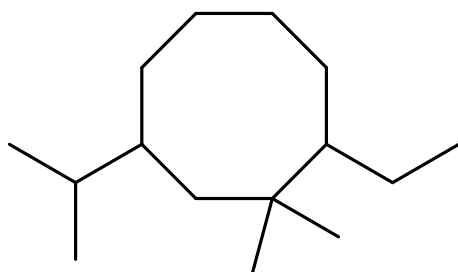
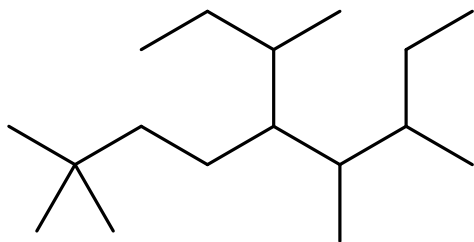


6 pts. Provide an appropriate name for the following:



4 pts. Draw acceptable structures to correspond to each IUPAC name.

A) 5-(*tert*-butyl)-3-ethyl-2,8-dimethyl-6-propylnonane

B) 4-cyclopropyl-2-ethyl-1,1-dimethylcycloheptane